

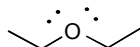
Chapter 2

Topic: Molecular Representations

Section: 2.1

Difficulty Level: Easy

1. What is the molecular formula for the following structure?



- A. $\text{C}_2\text{H}_6\text{O}$
- B. $\text{C}_4\text{H}_6\text{O}$
- C. $\text{C}_4\text{H}_{10}\text{O}$
- D. $\text{C}_2\text{H}_4\text{O}$

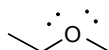
Ans: C

Topic: Molecular Representations

Section: 2.1

Difficulty Level: Easy

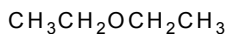
2. Which of the following structures is of a compound with a molecular formula of $\text{C}_2\text{H}_6\text{O}$?



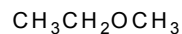
1



2



3



4

- A. 1
- B. 2
- C. 3
- D. 4

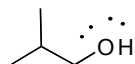
Ans: B

Topic: Molecular Representations

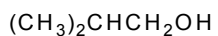
Section: 2.1

Difficulty Level: Easy

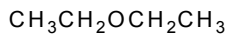
3. Which of the following is the correct condensed structure for the following structure?



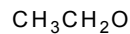
1



2



3



4

- A. 1
- B. 2
- C. 3
- D. 4

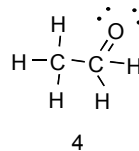
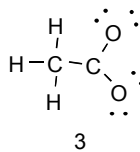
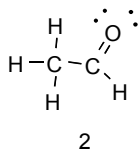
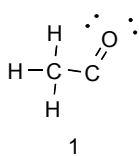
Ans: B

Topic: Molecular Representations

Section: 2.1

Difficulty Level: Easy

4. Which of the following is the correct Lewis structure for the following structure?



A. 1

B. 2

C. 3

D. 4

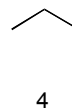
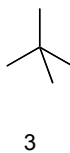
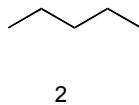
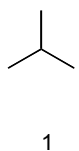
Ans: B

Topic: Molecular Representations

Section: 2.1

Difficulty Level: Easy

5. Which of the following is the correct bond-line structure for $(\text{CH}_3)_4\text{C}$?



A. 1

B. 2

C. 3

D. 4

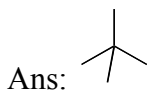
Ans: C

Topic: Molecular Representations

Section: 2.1

Difficulty Level: Medium

6. Draw the bond-line structure for $(\text{CH}_3)_4\text{C}$?



Topic: Molecular Representations

Section: 2.1

Difficulty Level: Easy

7. Which of the following is the correct molecular formula for $(\text{CH}_3)_4\text{C}$?



1

2

3

4

A. 1

B. 2

C. 3

D. 4

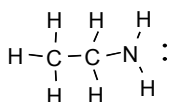
Ans: B

Topic: Molecular Representations

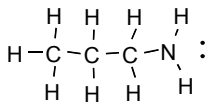
Section: 2.1

Difficulty Level: Easy

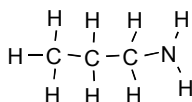
8. Which of the following is the correct Lewis structure for $\text{CH}_3\text{CH}_2\text{CH}_2\text{NH}_2$?



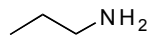
1



2



3



4

A. 1

B. 2

C. 3

D. 4

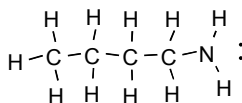
Ans: B

Topic: Molecular Representations

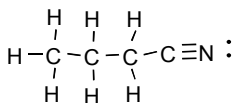
Section: 2.1

Difficulty Level: Easy

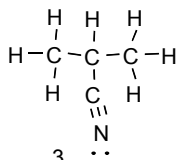
9. Which of the following is a valid Lewis structure for a compound with the molecular formula of $\text{C}_4\text{H}_{11}\text{N}$?



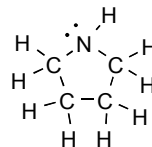
1



2



3



4

A. 1

B. 2

C. 3

D. 4

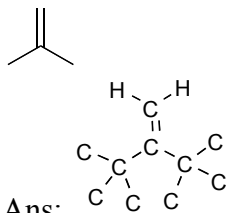
Ans: A

Topic: Molecular Representations

Section: 2.1

Difficulty Level: Medium

10. Draw a valid Lewis structure for the following compound.



Ans:

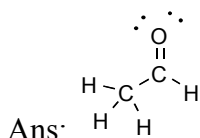
Topic: Molecular Representations

Section: 2.1

Difficulty Level: Hard

11. Draw a valid Lewis structure for the following compound.

H_3CCOH



Ans:

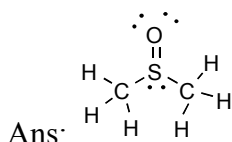
Topic: Molecular Representations

Section: 2.1

Difficulty Level: Hard

12. Draw a valid Lewis structure for the following compound.

H_3CSOCH_3



Ans:

Topic: Bond-Line Structures

Section: 2.2

Difficulty Level: Easy

13. Which of the following bond-line structures are of the same compound?



- A. 1 and 2
B. 2 and 3
C. 3 and 4
D. 1 and 3

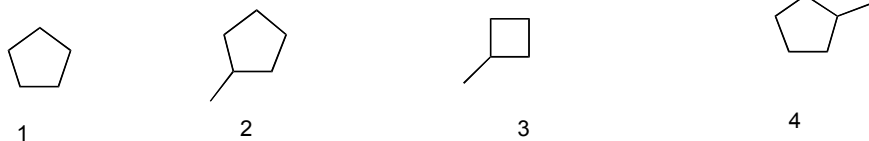
Ans: D

Topic: Bond-Line Structures

Section: 2.2

Difficulty Level: Easy

14. Which of the following bond-line structures are of the same compound?



A. 1 and 2

B. 2 and 3

C. 3 and 4

D. 2 and 4


Ans: D

Topic: Bond-Line Structures

Section: 2.2

Difficulty Level: Easy

15. In the following reaction, how many H's do you add or lose?



A. Add 1

B. Add 2

C. Lose 1

D. Lose 2

E. No change


Ans: D

Topic: Bond-Line Structures

Section: 2.2

Difficulty Level: Easy

16. In the following reaction, how many H's do you add or lose?



A. Add 1

B. Add 2

C. Lose 1

D. Lose 2

E. No change


Ans: B

Topic: Bond-Line Structures

Section: 2.2

Difficulty Level: Medium

17. In the following reaction, how many H's do you add or lose?



- A. Add 1
- B. Add 2
- C. Lose 1
- D. No change

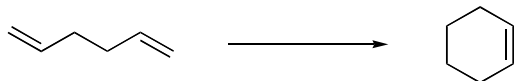
Ans: D

Topic: Bond-Line Structures

Section: 2.2

Difficulty Level: Medium

18. In the following reaction, how many H's do you add or lose?



- A. Add 1
- B. Add 2
- C. Lose 1
- D. No change

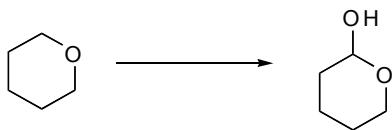
Ans: D

Topic: Bond-Line Structures

Section: 2.2

Difficulty Level: Easy

19. In the following reaction, how many H's do you add or lose?



- A. Add 1
- B. Add 2
- C. Lose 1
- D. No change

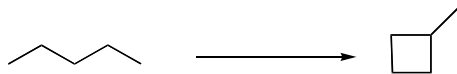
Ans: D

Topic: Bond-Line Structures

Section: 2.2

Difficulty Level: Easy

20. In the following reaction, how many H's do you add or lose?



- A. Add 1
- B. Add 2
- C. Lose 1
- D. Lose 2

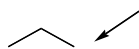
Ans: D

Topic: Bond-Line Structures

Section: 2.2

Difficulty Level: Easy

21. How many H's are on the indicated carbon?



- A. 1
- B. 2
- C. 3
- D. 4

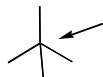
Ans: C

Topic: Bond-Line Structures

Section: 2.2

Difficulty Level: Easy

22. How many H's are on the indicated carbon?



- A. 1
- B. 2
- C. 3
- D. 0

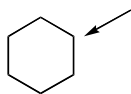
Ans: D

Topic: Bond-Line Structures

Section: 2.2

Difficulty Level: Easy

23. How many H's are on the indicated carbon?



- A. 1
- B. 2
- C. 3
- D. 4

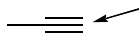
Ans: B

Topic: Bond-Line Structures

Section: 2.2

Difficulty Level: Medium

24. How many H's are on the indicated carbon?



A. 1

B. 2

C. 3

D. 4

Ans: A

Topic: Bond-Line Structures

Section: 2.2

Difficulty Level: Medium

25. How many H's are on the indicated carbon?



A. 1

B. 2

C. 3

D. 0

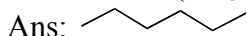
Ans: D

Topic: Bond-Line Structures

Section: 2.2

Difficulty Level: Medium

26. Convert $(\text{CH}_3\text{CH}_2\text{CH}_2)_2$ into a bond-line structure.

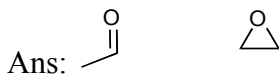


Topic: Bond-Line Structures

Section: 2.2

Difficulty Level: Hard

27. Draw bond-line structure for all of the isomers with a molecular formula of $\text{C}_2\text{H}_4\text{O}$.

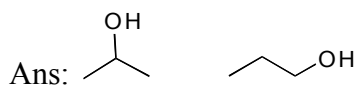


Topic: Bond-Line Structures

Section: 2.2

Difficulty Level: Hard

28. Draw bond-line structure for all of the isomers with a molecular formula of $\text{C}_3\text{H}_8\text{O}$.

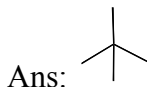


Topic: Bond-Line Structures

Section: 2.2

Difficulty Level: Hard

29. Draw a line-bond structure for a compound with a molecular formula of C_4H_{12} and one carbon with no hydrogens attached to it.

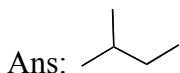


Topic: Bond-Line Structures

Section: 2.2

Difficulty Level: Hard

30. Draw a line-bond structure for a compound with a molecular formula of C_5H_{14} and one carbon with only one hydrogen attached to it.

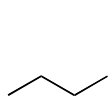


Topic: Identifying Functional Groups

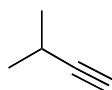
Section: 2.3

Difficulty Level: Easy

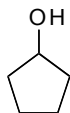
31. Which of the following structures contains an alcohol?



1



2



3



4

A. 1

B. 2

C. 3

D. 4

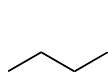
Ans: C

Topic: Identifying Functional Groups

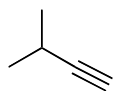
Section: 2.3

Difficulty Level: Easy

32. Which of the following structures contains an alkene?



1



2



3



4

- A. 1
- B. 2
- C. 3
- D. 4

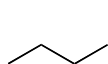
Ans: C

Topic: Identifying Functional Groups

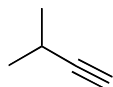
Section: 2.3

Difficulty Level: Easy

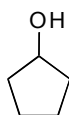
33. Which of the following structures contains an amine?



1



2



3



4

- A. 1
- B. 2
- C. 3
- D. 4

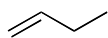
Ans: D

Topic: Identifying Functional Groups

Section: 2.3

Difficulty Level: Easy

34. Which of the following structures contains a ketone?



1



2



3



4

- A. 1
- B. 2
- C. 3
- D. 4

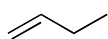
Ans: B

Topic: Identifying Functional Groups

Section: 2.3

Difficulty Level: Easy

35. Which of the following structures contains an aromatic ring?



1



2



3



4

- A. 1
- B. 2
- C. 3
- D. 4

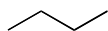
Ans: D

Topic: Identifying Functional Groups

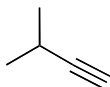
Section: 2.3

Difficulty Level: Easy

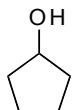
36. Which of the following structures contains an alkyne?



1



2



3



4

- A. 1
- B. 2
- C. 3
- D. 4

Ans: B

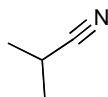
Topic: Identifying Functional Groups

Section: 2.3

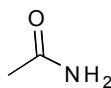
Difficulty Level: Easy

37. Which of the following structures contains a nitrile?

2



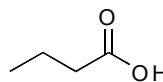
1



2



3



4

- A. 1
- B. 2
- C. 3
- D. 4

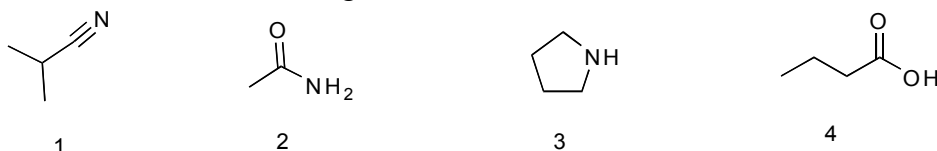
Ans: A

Topic: Identifying Functional Groups

Section: 2.3

Difficulty Level: Easy

38. Which of the following structures contains an amide?



- A. 1
B. 2
C. 3
D. 4

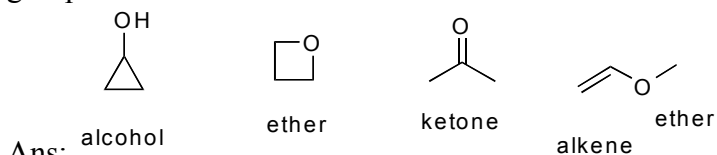
Ans: B

Topic: Identifying Functional Groups

Section: 2.3

Difficulty Level: Hard

39. Draw all the isomers with a molecular formula of C_3H_6O and label all the functional groups.



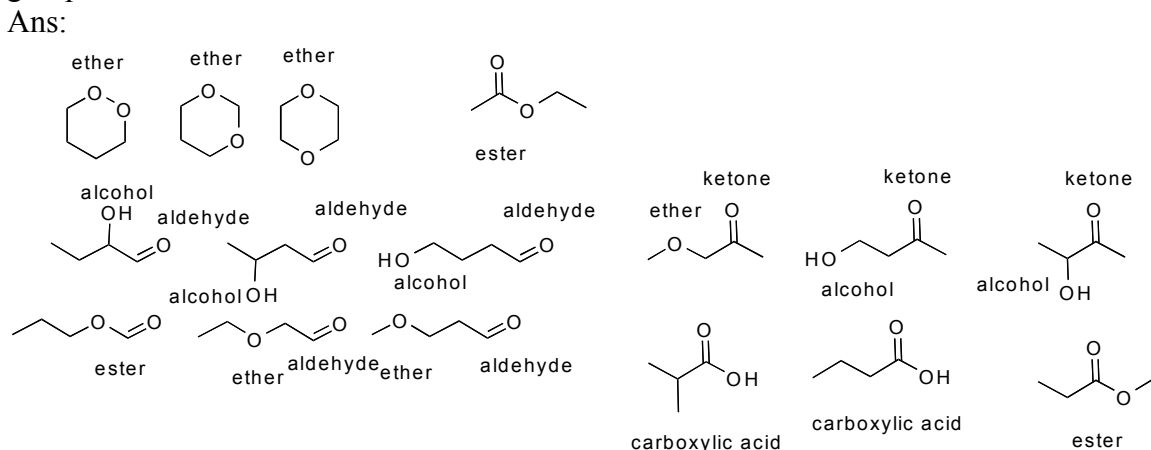
Ans:

Topic: Identifying Functional Groups

Section: 2.3

Difficulty Level: Hard

40. Draw the isomers with a molecular formula of $C_4H_8O_2$ and label the functional groups.

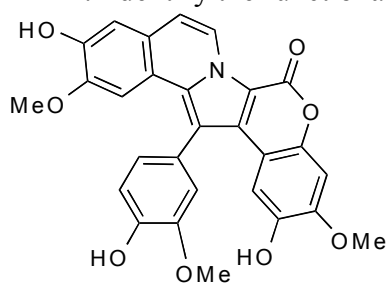


Topic: Identifying Functional Groups

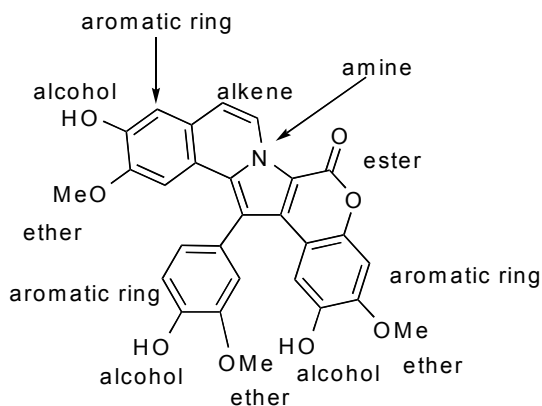
Section: 2.3

Difficulty Level: Hard

41. Identify the functional groups in the following compound.



Ans:

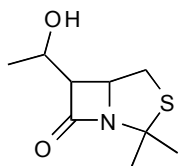


Topic: Identifying Functional Groups

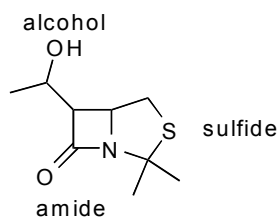
Section: 2.3

Difficulty Level: Hard

42. Identify the functional groups in the following compound.



Ans:

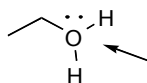


Topic: Formal Charges

Section: 2.4

Difficulty Level: Easy

43. Calculate the formal charge on the indicated atom.



- A. +1
- B. +2
- C. -1
- D. -2

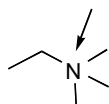
Ans: A

Topic: Formal Charges

Section: 2.4

Difficulty Level: Easy

44. Calculate the formal charge on the indicated atom.



- A. +1
- B. +2
- C. -1
- D. -2

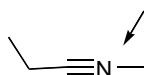
Ans: A

Topic: Formal Charges

Section: 2.4

Difficulty Level: Easy

45. Calculate the formal charge on the indicated atom.



- A. +1
- B. +2
- C. -1
- D. -2

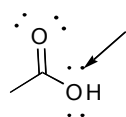
Ans: A

Topic: Formal Charges

Section: 2.4

Difficulty Level: Easy

46. Calculate the formal charge on the indicated atom.



- A. +1
- B. +2
- C. -1
- D. 0

Ans: D

Topic: Formal Charges

Section: 2.4

Difficulty Level: Easy

47. Calculate the formal charge on the indicated atom.



A. +1

B. +2

C. -1

D. 0

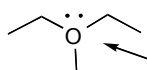
Ans: D

Topic: Formal Charges

Section: 2.4

Difficulty Level: Easy

48. Calculate the formal charge on the indicated atom.



A. +1

B. +2

C. -1

D. -2

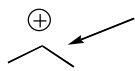
Ans: A

Topic: Formal Charges

Section: 2.4

Difficulty Level: Easy

49. Determine the number of hydrogens on the indicated atom.



A. 1

B. 2

C. 3

D. 4

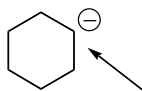
Ans: A

Topic: Formal Charges

Section: 2.4

Difficulty Level: Easy

50. Determine the number of hydrogens on the indicated atom.



- A. 1
- B. 2
- C. 3
- D. 4

Ans: A

Topic: Formal Charges

Section: 2.4

Difficulty Level: Easy

51. Determine the number of hydrogens on the indicated atom.



- A. 1
- B. 2
- C. 3
- D. 0

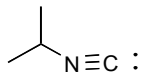
Ans: D

Topic: Formal Charges

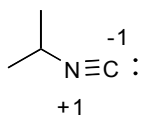
Section: 2.4

Difficulty Level: Medium

52. Determine the formal charges on every atom in the following structure.



Ans:



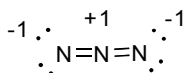
Topic: Formal Charges

Section: 2.4

Difficulty Level: Hard

53. Draw a valid Lewis structure, with all lone pairs and formal charges for the azide anion (N_3^-).

Ans:

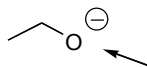


Topic: Identifying Lone Pairs

Section: 2.5

Difficulty Level: Easy

54. Determine the number of lone pairs of electrons on the indicated atom.



- A. 1
- B. 2
- C. 3
- D. 4

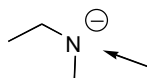
Ans: C

Topic: Identifying Lone Pairs

Section: 2.5

Difficulty Level: Easy

55. Determine the number of lone pairs of electrons on the indicated atom.



- A. 1
- B. 2
- C. 3
- D. 4

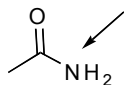
Ans: B

Topic: Identifying Lone Pairs

Section: 2.5

Difficulty Level: Easy

56. Determine the number of lone pairs of electrons on the indicated atom.



- A. 1
- B. 2
- C. 3
- D. 4

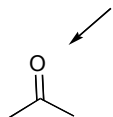
Ans: A

Topic: Identifying Lone Pairs

Section: 2.5

Difficulty Level: Easy

57. Determine the number of lone pairs of electrons on the indicated atom.



- A. 1
- B. 2
- C. 3
- D. 4

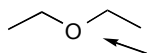
Ans: B

Topic: Identifying Lone Pairs

Section: 2.5

Difficulty Level: Easy

58. Determine the number of lone pairs of electrons on the indicated atom.



- A. 1
- B. 2
- C. 3
- D. 4

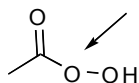
Ans: B

Topic: Identifying Lone Pairs

Section: 2.5

Difficulty Level: Easy

59. Determine the number of lone pairs of electrons on the indicated atom.



- A. 1
- B. 2
- C. 3
- D. 4

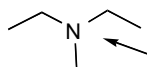
Ans: B

Topic: Identifying Lone Pairs

Section: 2.5

Difficulty Level: Easy

60. Determine the number of lone pairs of electrons on the indicated atom.



- A. 1
- B. 2
- C. 3
- D. 4

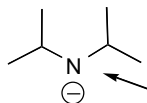
Ans: A

Topic: Identifying Lone Pairs

Section: 2.5

Difficulty Level: Easy

61. Determine the number of lone pairs of electrons on the indicated atom.



- A. 1
- B. 2
- C. 3
- D. 4

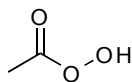
Ans: B

Topic: Lone Pairs

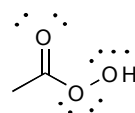
Section: 2.5

Difficulty Level: Medium

62. Draw all of the lone pairs on the following compound.



Ans:

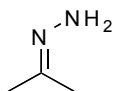


Topic: Lone Pairs

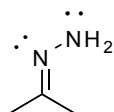
Section: 2.5

Difficulty Level: Medium

63. Draw all of the lone pairs on the following compound.



Ans:

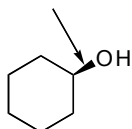


Topic: Three-Dimensional Bond-line Structures

Section: 2.6

Difficulty Level: Easy

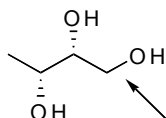
64. For the following compound, is the indicated bond up or down?



- A. Up
 - B. Down
- Ans: A

Topic: Three-Dimensional Bond-line Structures
 Section: 2.6
 Difficulty Level: Easy

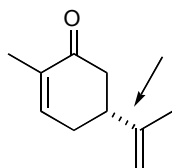
65. For the following compound, is the indicated bond up or down?



- A. Up
 - B. Down
 - C. Neither
- Ans: C

Topic: Three-Dimensional Bond-line Structures
 Section: 2.6
 Difficulty Level: Easy

66. For the following compound, is the indicated bond up or down?



- A. Up
 - B. Down
 - C. Neither
- Ans: B

Topic: Three-Dimensional Bond-line Structures
 Section: 2.6
 Difficulty Level: Easy

67. Which of the following structures is the same as structure A?



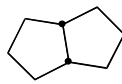
1



2



3



4

- A. 1
- B. 2

C. 3

D. 4

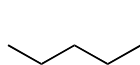
Ans: B

Topic: Three-Dimensional Bond-line Structures

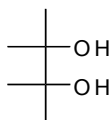
Section: 2.6

Difficulty Level: Easy

68. Which of the following structures is a Fischer projection?



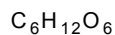
1



2



3



4

A. 1

B. 2

C. 3

D. 4

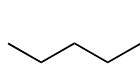
Ans: B

Topic: Three-Dimensional Bond-line Structures

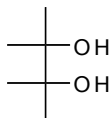
Section: 2.6

Difficulty Level: Easy

69. Which of the following structures is a Haworth projection?



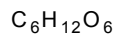
1



2



3



4

A. 1

B. 2

C. 3

D. 4

Ans: C

Topic: Three-Dimensional Bond-line Structures

Section: 2.6

Difficulty Level: Medium

70. Draw an example of a Fischer projection.

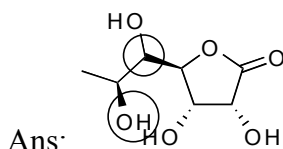
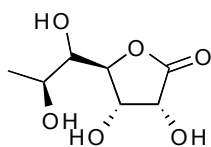
Ans: many!

Topic: Three-Dimensional Bond-line Structures

Section: 2.6

Difficulty Level: Medium

71. Circle the atoms which are pointing up in the following compound.

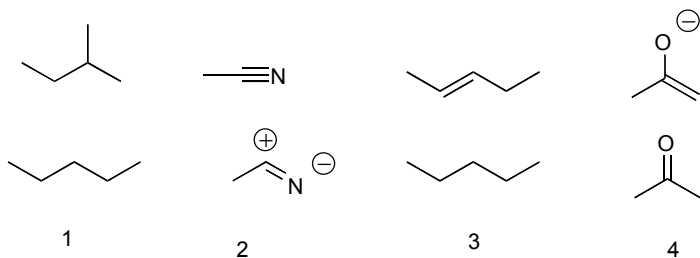


Topic: Introduction to Resonance

Section: 2.7

Difficulty Level: Easy

72. Which of the following pairs of structures are resonance structures?



A. 1

B. 2

C. 3

D. 4

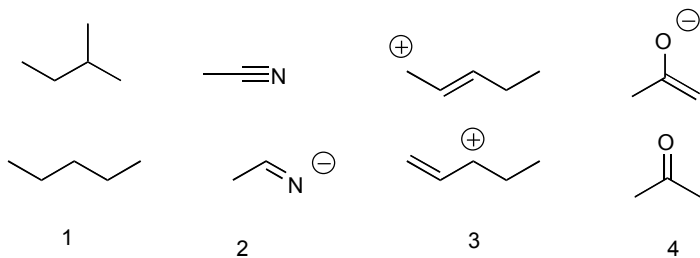
Ans: B

Topic: Introduction to Resonance

Section: 2.7

Difficulty Level: Easy

73. Which of the following pairs of structures are resonance structures?



A. 1

B. 2

C. 3

D. 4

Ans: C

Topic: Introduction to Resonance

Section: 2.7

Difficulty Level: Hard

74. When do we use resonance structures?

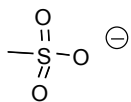
Ans: When the structure of a compound cannot be adequately described by one single structure.

Topic: Introduction to Resonance

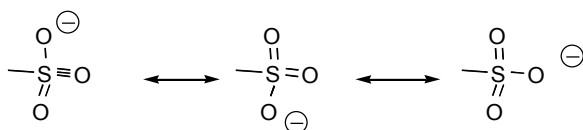
Section: 2.7

Difficulty Level: Hard

75. Draw all valid resonance structures for the following anion.



Ans:

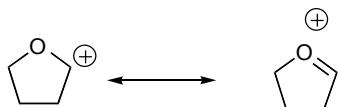


Topic: Curved Arrows

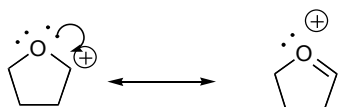
Section: 2.8

Difficulty Level: Medium

76. Draw in the appropriate arrows for the following resonance pairs.



Ans:

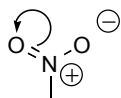


Topic: Curved Arrows

Section: 2.8

Difficulty Level: Easy

77. In the following structure, the arrow indicates that electrons are moving to what atom?



A. C

B. O

C. H
D. N
Ans: B

Topic: Curved Arrows
Section: 2.8
Difficulty Level: Easy

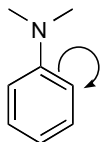
78. In the following structure, the arrow indicates that electrons are moving to what atom?



A. C
B. O
C. H
D. N
Ans: B

Topic: Curved Arrows
Section: 2.8
Difficulty Level: Easy

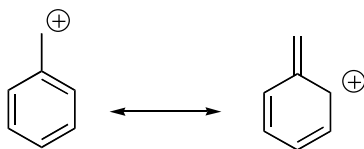
79. In the following structure, the arrow indicates that electrons are moving to what atom?



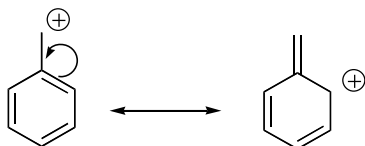
A. C
B. O
C. H
D. N
Ans: A

Topic: Curved Arrows
Section: 2.8
Difficulty Level: Hard

80. Draw in the appropriate arrows for the following resonance pairs.



Ans:

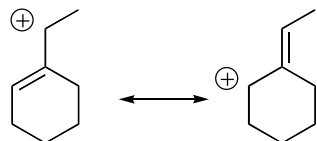


Topic: Curved Arrows

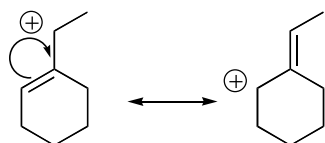
Section: 2.8

Difficulty Level: Hard

81. Draw in the appropriate arrows for the following resonance pairs.



Ans:

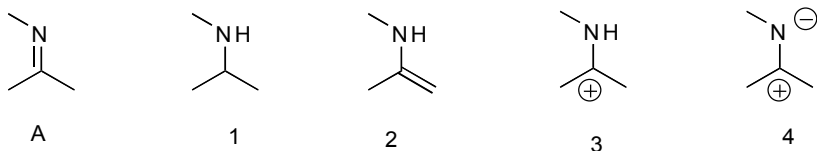


Topic: Formal Charges in Resonance Structures

Section: 2.9

Difficulty Level: Easy

82. Which of the following is a correct resonance structure of A?



A. 1

B. 2

C. 3

D. 4

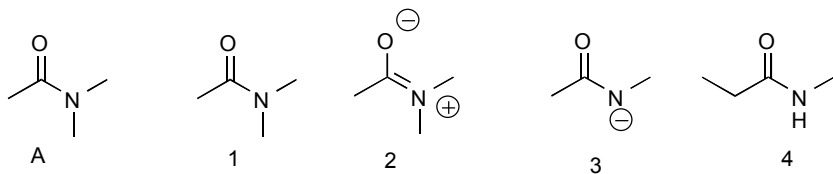
Ans: D

Topic: Formal Charges in Resonance Structures

Section: 2.9

Difficulty Level: Easy

83. Which of the following is a correct resonance structure of A?



A. 1

B. 2

C. 3

D. 4

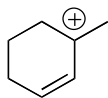
Ans: B

Topic: Formal Charges in Resonance Structures

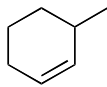
Section: 2.9

Difficulty Level: Easy

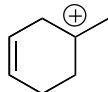
84. Which of the following is a correct resonance structure of A?



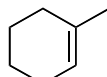
A



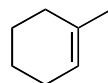
1



2



3



4

A. 1

B. 2

C. 3

D. 4

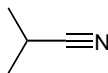
Ans: C

Topic: Formal Charges in Resonance Structures

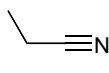
Section: 2.9

Difficulty Level: Easy

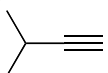
85. Which of the following is a correct resonance structure of A?



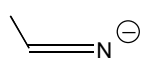
A



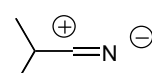
1



2



3



4

A. 1

B. 2

C. 3

D. 4

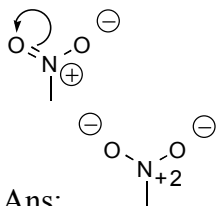
Ans: D

Topic: Formal Charges in Resonance Structures

Section: 2.9

Difficulty Level: Medium

86. Draw the resonance structure that is indicated by the following arrows.



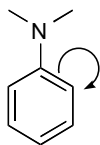
Ans:

Topic: Formal Charges in Resonance Structures

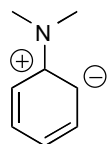
Section: 2.9

Difficulty Level: Medium

87. Draw the resonance structure that is indicated by the following arrows.



Ans:

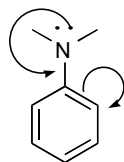


Topic: Formal Charges in Resonance Structures

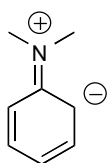
Section: 2.9

Difficulty Level: Medium

88. Draw the resonance structure that is indicated by the following arrows.



Ans:

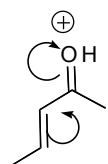


Topic: Formal Charges in Resonance Structures

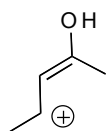
Section: 2.9

Difficulty Level: Medium

89. Draw the resonance structure that is indicated by the following arrows.



Ans:



Topic: Formal Charges in Resonance Structures

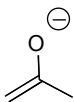
Section: 2.9

Difficulty Level: Medium

90. Draw the resonance structure that is indicated by the following arrows.



Ans:

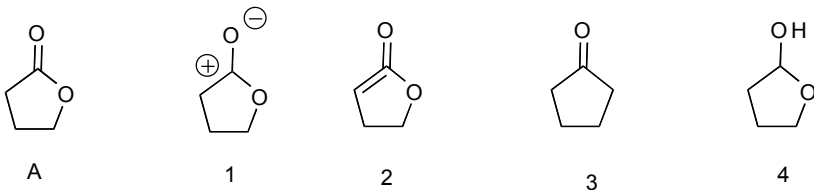


Topic: Pattern Recognition

Section: 2.10

Difficulty Level: Easy

91. Which of the following is a correct resonance structure of A?



- A. 1
- B. 2
- C. 3
- D. 4

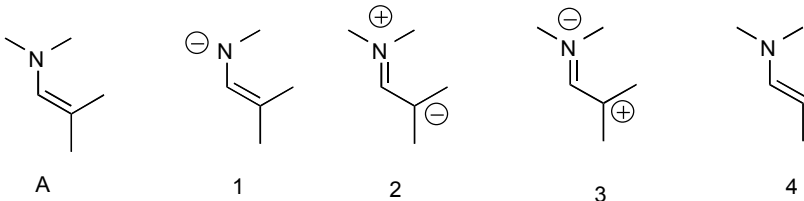
Ans: A

Topic: Pattern Recognition

Section: 2.10

Difficulty Level: Easy

92. Which of the following is a correct resonance structure of A?



- A. 1
- B. 2
- C. 3
- D. 4

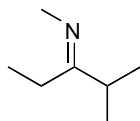
Ans: B

Topic: Pattern Recognition

Section: 2.10

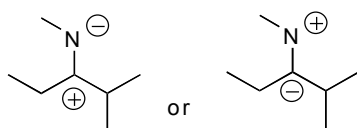
Difficulty Level: Medium

93. Draw a resonance structure of A.



A

Ans:

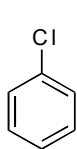


Topic: Pattern Recognition

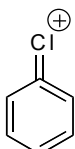
Section: 2.10

Difficulty Level: Easy

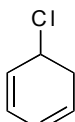
94. Which of the following is a correct resonance structure of A?



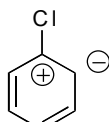
A



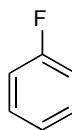
1



2



3



4

A. 1

B. 2

C. 3

D. 4

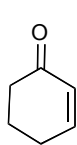
Ans: C

Topic: Pattern Recognition

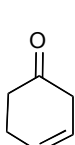
Section: 2.10

Difficulty Level: Easy

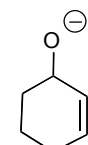
95. Which of the following is a correct resonance structure of A?



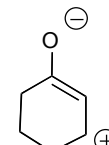
A



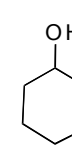
1



2



3



4

A. 1

B. 2

C. 3

D. 4

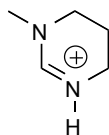
Ans: C

Topic: Pattern Recognition

Section: 2.10

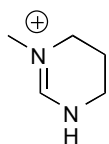
Difficulty Level: Hard

96. Draw a resonance structure of A.



A

Ans:



Topic: Pattern Recognition

Section: 2.10

Difficulty Level: Easy

97. Which of the following is a correct resonance structure of A?



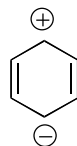
A



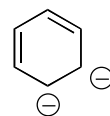
1



2



3



4

A. 1

B. 2

C. 3

D. 4

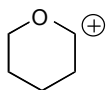
Ans: C

Topic: Pattern Recognition

Section: 2.10

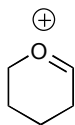
Difficulty Level: Medium

98. Draw a resonance structure of A.



A

Ans:

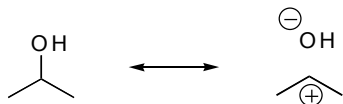


Topic: Assessing Importance

Section: 2.11

Difficulty Level: Easy

99. Is the following a valid resonance pair?



A. Yes

B. No

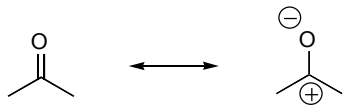
Ans: B

Topic: Assessing Importance

Section: 2.11

Difficulty Level: Easy

100. Is the following a valid resonance pair?



A. Yes

B. No

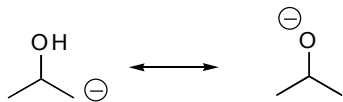
Ans: A

Topic: Assessing Importance

Section: 2.11

Difficulty Level: Easy

101. Is the following a valid resonance pair?



A. Yes

B. No

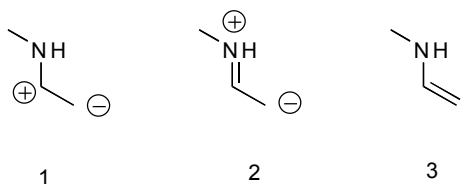
Ans: B

Topic: Assessing Importance

Section: 2.11

Difficulty Level: Easy

102. Which of the following resonance structures is the most significant?



- A. 1
B. 2
C. 3

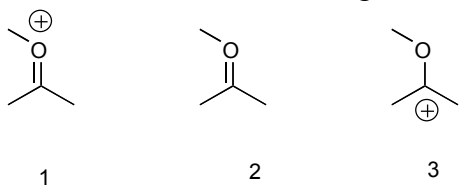
Ans: C

Topic: Assessing Importance

Section: 2.11

Difficulty Level: Easy

103. Which of the following resonance structures is the most significant?



- A. 1
B. 2
C. 3

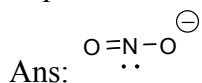
Ans: C

Topic: Assessing Importance

Section: 2.11

Difficulty Level: Hard

104. Draw the resonance structures of the nitrite anion (NO_2^-) and indicate the most important one.

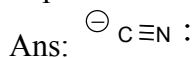


Topic: Assessing Importance

Section: 2.11

Difficulty Level: Hard

105. Draw the resonance structures of the cyanide anion (CN^-), indicating the most important one.

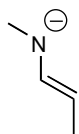


Topic: Assessing Importance

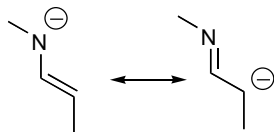
Section: 2.11

Difficulty Level: Medium

106. Draw the resonance structures of the following anion.



Ans:

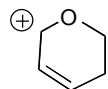


Topic: Assessing Importance

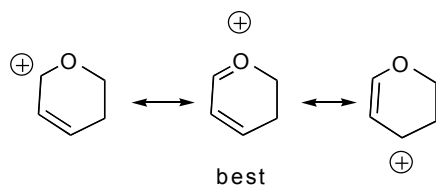
Section: 2.11

Difficulty Level: Hard

107. Draw the resonance structures of the following cation and indicate the most important one.



Ans:

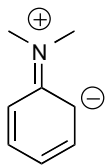


Topic: Assessing Importance

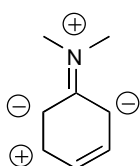
Section: 2.11

Difficulty Level: Easy

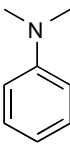
108. Which of the following resonance structures of dimethylaniline is the most significant?



1



2



3

A. 1

B. 2

C. 3

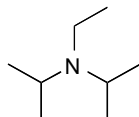
Ans: C

Topic: Delocalized and Localized Lone Pairs

Section: 2.12

Difficulty Level: Easy

109. The lone pair in the following compound is:



A. localized

B. delocalized

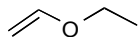
Ans: A

Topic: Delocalized and Localized Lone Pairs

Section: 2.12

Difficulty Level: Easy

110. The lone pairs in the following compound are:



A. localized

B. delocalized

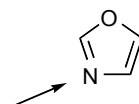
Ans: B

Topic: Delocalized and Localized Lone Pairs

Section: 2.12

Difficulty Level: Easy

111. The indicated lone pair in the following compound is:



A. localized

B. delocalized

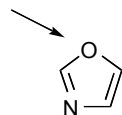
Ans: A

Topic: Delocalized and Localized Lone Pairs

Section: 2.12

Difficulty Level: Easy

112. The indicated lone pair in the following compound is:



A. localized

B. delocalized

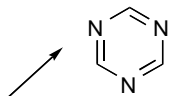
Ans: B

Topic: Delocalized and Localized Lone Pairs

Section: 2.12

Difficulty Level: Easy

113. The indicated lone pair in the following compound is:



A. localized

B. delocalized

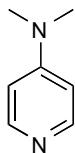
Ans: A

Topic: Delocalized and Localized Lone Pairs

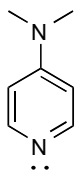
Section: 2.12

Difficulty Level: Hard

114. Draw in all localized lone pairs on the following structure.



Ans:

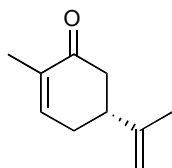


Topic: Delocalized and Localized Lone Pairs

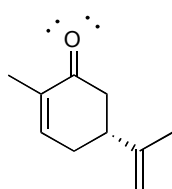
Section: 2.12

Difficulty Level: Hard

115. Draw in all localized lone pairs on the following structure.



Ans:

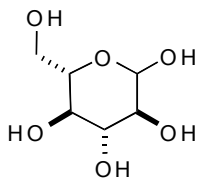


Topic: Delocalized and Localized Lone Pairs

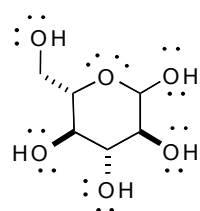
Section: 2.12

Difficulty Level: Hard

116. Draw in all localized lone pairs on the following structure.



Ans:

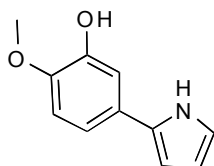


Topic: Delocalized and Localized Lone Pairs

Section: 2.12

Difficulty Level: Hard

117. Draw in all delocalized lone pairs on the following structure.



Ans:

